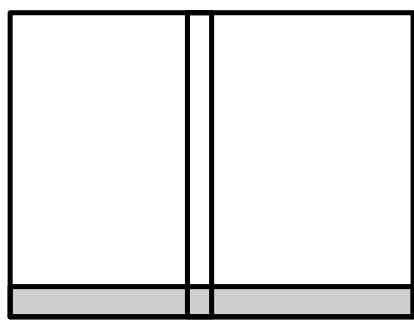
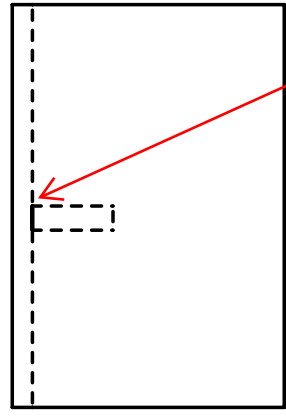


\uparrow b



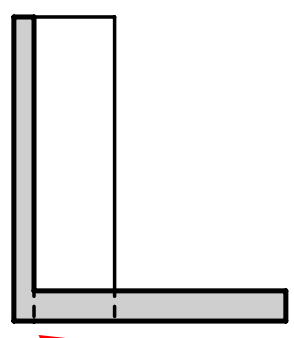
a \leftarrow

Schnitt b - b



verdeckte Kante,
warum ???

Schnitt a - a



verdeckte Kante,
warum ???